



Order numbers

1 Use cubes to make 12, 7 and 15

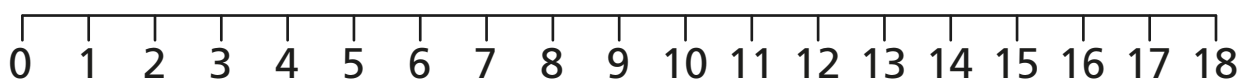
a) Which number is the smallest?

b) Which number is the greatest?

c) Write the numbers in order.

Start with the greatest number.

2 a) How many tiles are there?



b) Write the number of tiles in order.

Start with the greatest number.

<input type="text"/>	<input type="text"/>	<input type="text"/>
----------------------	----------------------	----------------------

3 Order the numbers from smallest to greatest.

a) 12, 8, 15

<input type="text"/>	<input type="text"/>	<input type="text"/>
----------------------	----------------------	----------------------

b) 16, 18, 17

<input type="text"/>	<input type="text"/>	<input type="text"/>
----------------------	----------------------	----------------------

c) 20, 13, 9

<input type="text"/>	<input type="text"/>	<input type="text"/>
----------------------	----------------------	----------------------

d) 11, 19, 18

<input type="text"/>	<input type="text"/>	<input type="text"/>
----------------------	----------------------	----------------------

4 Order the numbers from greatest to smallest.

a) 16, 7, 13

<input type="text"/>	<input type="text"/>	<input type="text"/>
----------------------	----------------------	----------------------

b) 9, 12, 17

<input type="text"/>	<input type="text"/>	<input type="text"/>
----------------------	----------------------	----------------------

c) 9, 20, 19

<input type="text"/>	<input type="text"/>	<input type="text"/>
----------------------	----------------------	----------------------

d) 14, 17, 12


<input type="text"/>	<input type="text"/>	<input type="text"/>
----------------------	----------------------	----------------------



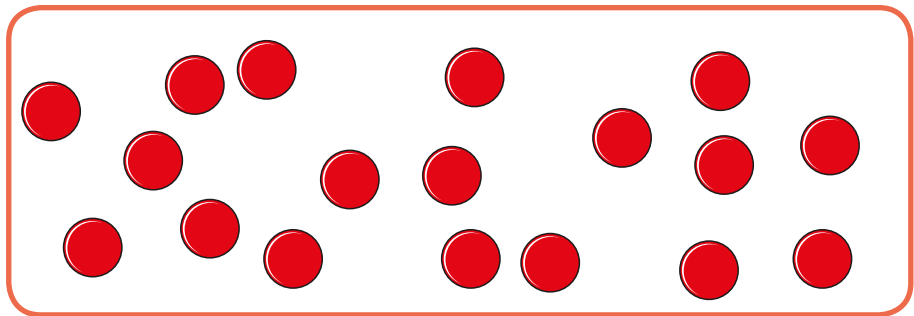
- 5 The counters are in order from smallest to greatest.

Draw the missing counters.

smallest



greatest



Is there more than one answer?