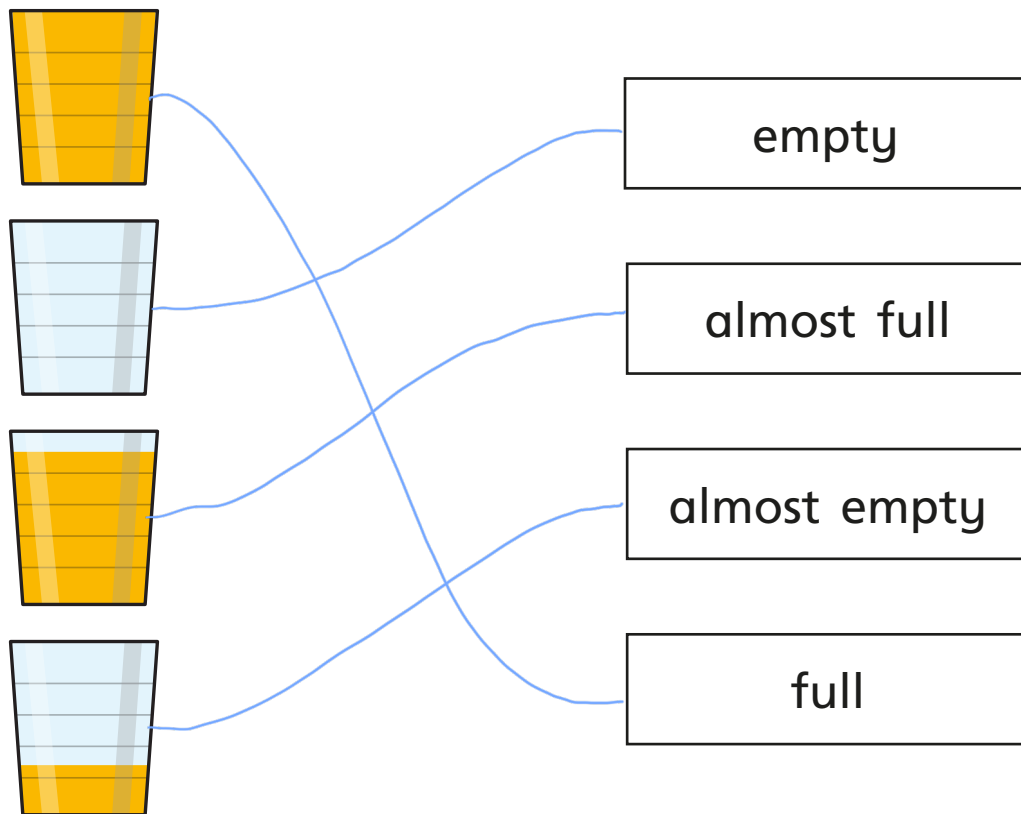


Introduce capacity and volume

I a) Match the picture to the label.

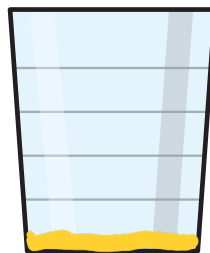


b) Show 'almost full' and 'almost empty' another way.

e.g.



almost full



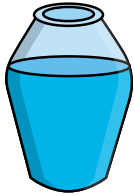
almost empty



2 Choose a word to complete the sentence.

more

less




A



B

A has more than B.



A



B

A has less than B.

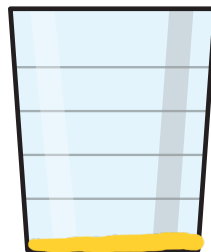
3 Show the volume in each glass.

- A is nearly full.
- B is nearly empty.
- A has more than C.
- C has more than B.

e.g.



A



B



C

Compare answers with a partner.

