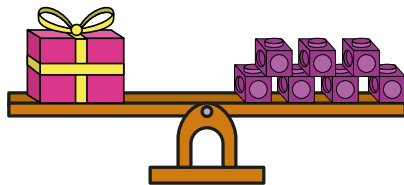
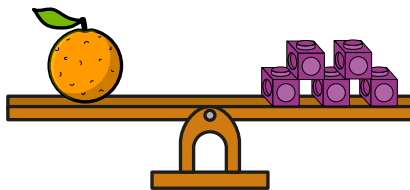


Compare mass

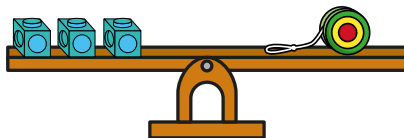
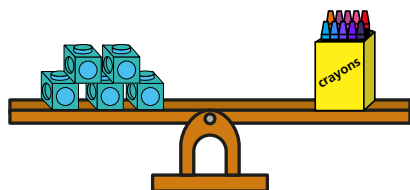
I Which object is heavier?

Tick your answer.



a)


☒

☐

b)


☐

☒

c)


☒

☐

2 Look at the scales.



Choose a word to complete each sentence.

heavier

lighter

a) The orange is heavier than the cherries.

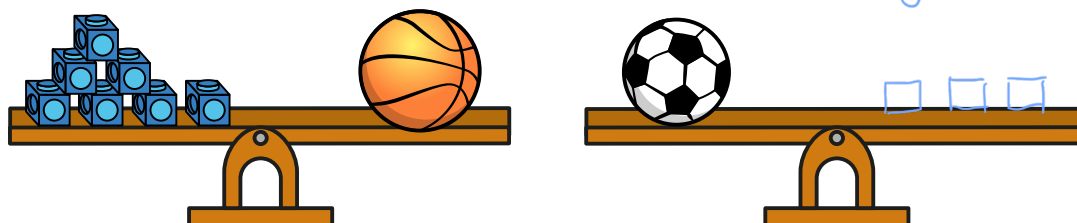
b) The apple is heavier than the orange.

c) The cherries are lighter than the apple.

d) The apple is heavier than the cherries.

3 The basketball is heavier than the football.

Draw cubes to complete the scales.



Is there more than one answer?