


Find the difference

- 1 Mo has 3 strawberries.
Kim has 5 strawberries.



How many more strawberries does Kim have than Mo?

Kim has more strawberries than Mo.


- 2 Ben has 4 cakes.
Jo has 8 cakes.



How many fewer cakes does Ben have than Jo?

Ben has fewer cakes than Jo.

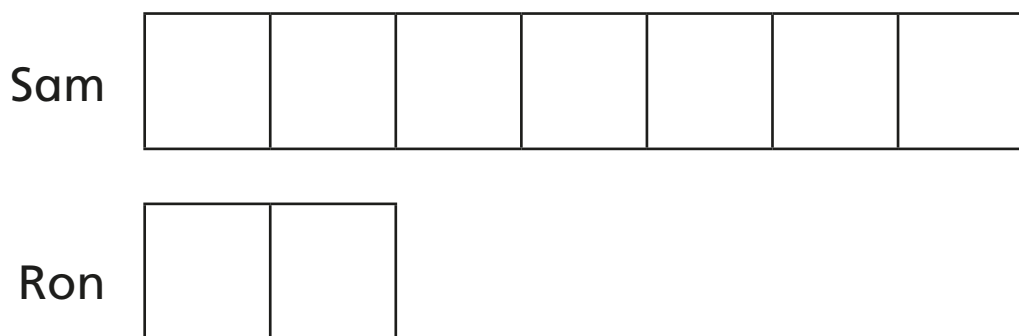
- 3 Tom has 5 pencils.
Max has 8 pencils.



What is the difference between the number of pencils?

The difference between the number of pencils is

- 4 Here is a bar model.



What does the bar model show?

What can you work out?

