


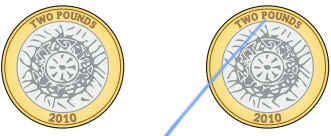
# Compare money

- 1 Which is the greatest amount of money in each pair?


Tick your answer.


a)







b)







c)





d)





How did you compare the amounts?

- 2 Alex and Amir each have some money.  
a) Alex has 23p.

Draw the money Alex could have.



- b) Amir has £23

Draw the money Amir could have.



- c) Who has the most money? Amir  
How do you know?

- 3 Eva has this money.







Teddy has the same amount of pounds as Eva but fewer pence.



How much money could Teddy have?

e.g. £ 7 and 2 p

4 Write  $<$ ,  $>$  or  $=$  to compare the amounts.

a)   $=$  

b)   $<$  

c)   $>$  

5 Draw money to make the statement correct.

Eg.

  $>$  

6 Write  $<$ ,  $>$  or  $=$  to compare the amounts.

- a) £3 and 20p  $<$  £3 and 27p
- b) £5 and 67p  $>$  £2 and 67p
- c) £10 and 9p  $<$  £10 and 20p
- d) £5 + £5 + 20p  $>$  £10 + 10p
- e) £20 + 10p + 5p  $=$  5p + £10 + £10 + 5p + 5p

7 Complete the statements.

e.g.

a) £7 and 21p  $>$  £  and  p

b) £  and  p  $>$  £7 and 21p

c) £7 and 21p  $=$  £  and  p

Is there more than one way to complete each statement?

Talk about it with a partner.

