


Find a half

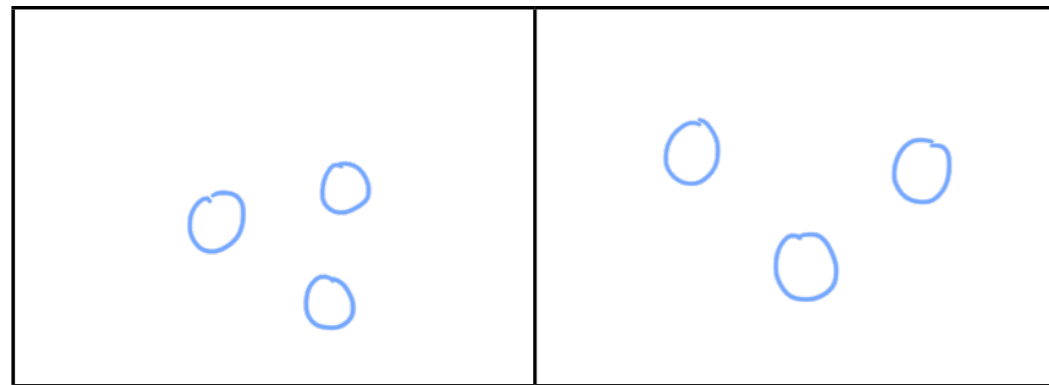
1 Here are 6 counters.



a) Share the counters into 2 equal groups.

Group 1

Group 2



b) Complete the sentences.

There are 6 counters.

The counters are shared equally between

groups.

There are counters in each group.

$\frac{1}{2}$ of 6 is equal to



2 Use counters.

a) Can you share 10 counters into 2 equal groups?


Yes

b) Can you share 11 counters into 2 equal groups?

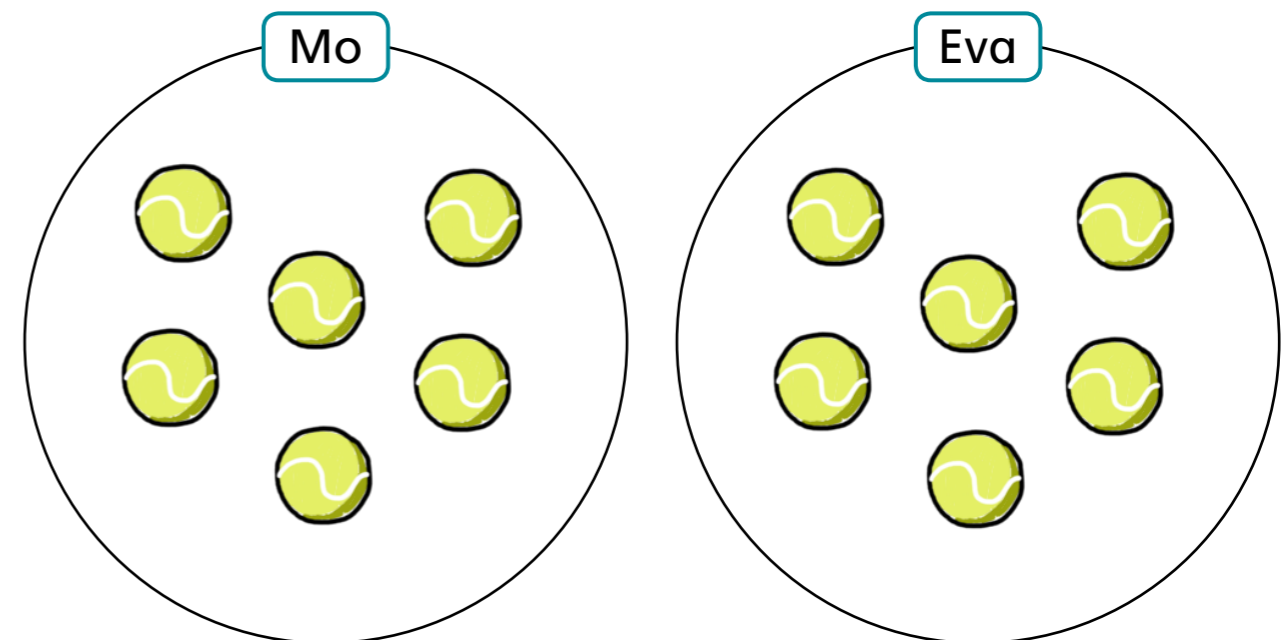
No

Talk about it with a partner.

3 Mo and Eva have 12 tennis balls.




Share the tennis balls equally between Mo and Eva.




- 4 Find $\frac{1}{2}$ of each number.


Use the arrays to help you.



$$\frac{1}{2} \text{ of } 10 = \boxed{5}$$

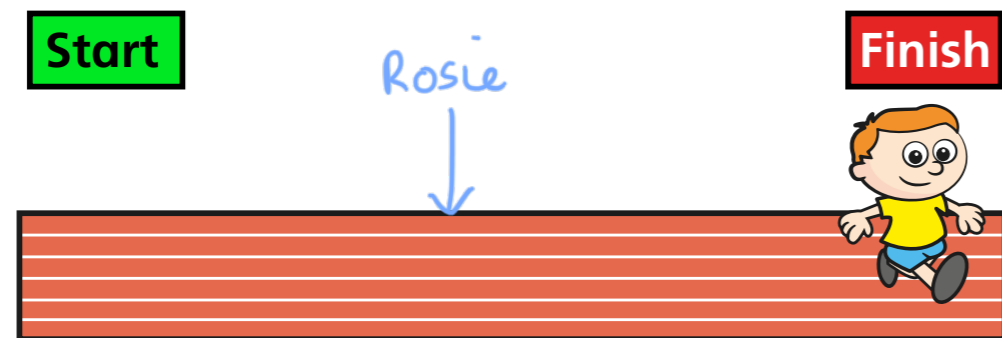


$$\frac{1}{2} \text{ of } 16 = \boxed{8}$$



$$\frac{1}{2} \text{ of } 20 = \boxed{10}$$

- 5 Ron has run 20 m.



Rosie has run half that distance.

- a) Draw an arrow on the running track to show where Rosie is.

- a) How far has Rosie run?

$$\boxed{10} \text{ m}$$



- 6 Here are half of Annie's sweets.



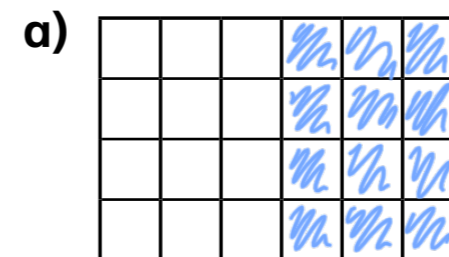
How many sweets does Annie have in total?

$$\boxed{12}$$

Compare answers with a partner.

- 7 Colour $\frac{1}{2}$ of each shape.

Use the shapes to help you complete the number sentences.



$$\frac{1}{2} \text{ of } \boxed{24} = \boxed{12}$$



$$\frac{1}{2} \text{ of } \boxed{18} = \boxed{9}$$

- 8 Complete the number sentences.

$$\frac{1}{2} \text{ of } \boxed{20} = 10$$

$$\frac{1}{2} \text{ of } \boxed{14} = 7$$

