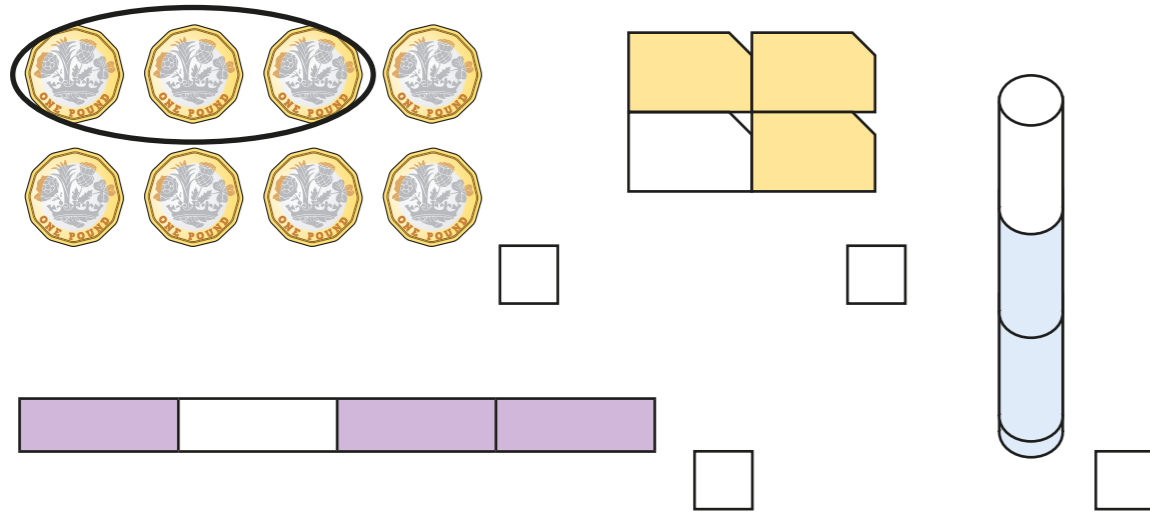
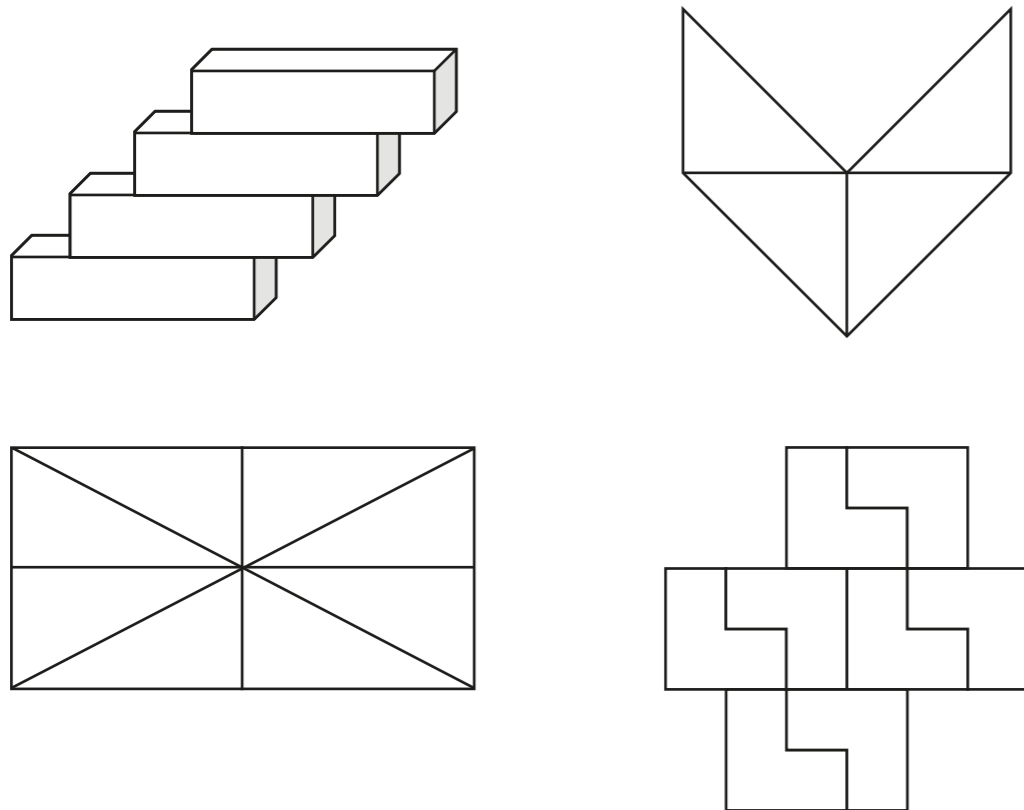


Find three quarters


1 Tick the representations that show $\frac{3}{4}$



2 Colour $\frac{3}{4}$ of each shape.



3 Rosie is sharing out 16 strawberries. She shares them into 4 equal groups.



a) What is $\frac{1}{4}$ of the strawberries?

$$\frac{1}{4} \text{ of } 16 = \square$$

b) What is $\frac{2}{4}$ of the strawberries?

$$\frac{2}{4} \text{ of } 16 = \square$$

c) What is $\frac{3}{4}$ of the strawberries?

$$\frac{3}{4} \text{ of } 16 = \square$$

d) What is $\frac{4}{4}$ of the strawberries?

$$\frac{4}{4} \text{ of } 16 = \square$$

4 Work out $\frac{3}{4}$ of £20



£




- 5 Year 2 are planting sunflower seeds.

Annie has 4 pots and 12 seeds.

She plants the same number of seeds in each pot.

- a) Draw the seeds she puts in each pot.

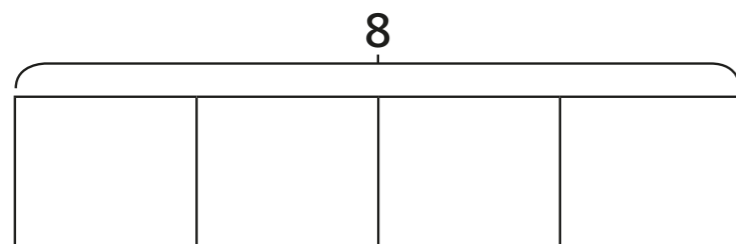


- b) Complete the number sentences.

$$\frac{1}{4} \text{ of } 12 = \square \qquad \frac{3}{4} \text{ of } 12 = \square$$

- 6 The bar model is split into 4 equal parts.

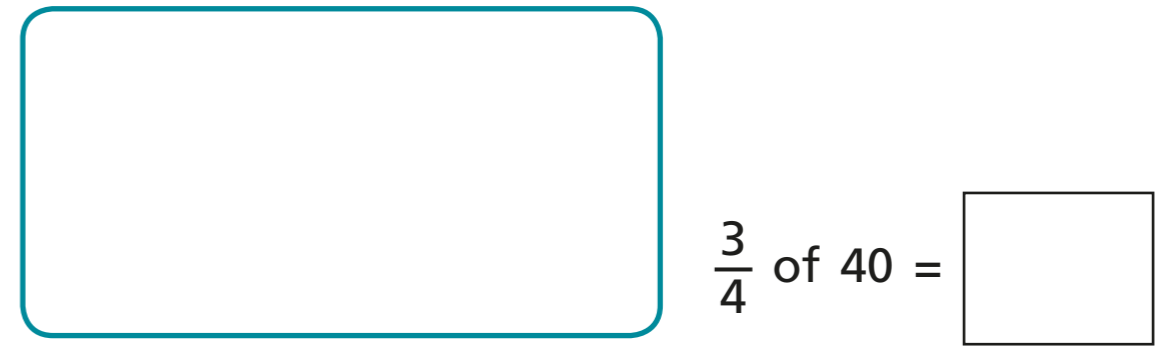
- a) What is the value of each part?
Label it on the bar model.



- b) Use the bar model to find $\frac{3}{4}$ of 8



- 7 Draw a bar model to find $\frac{3}{4}$ of 40




- 8 Write $<$, $>$ or $=$ to compare the statements.

a) $\frac{1}{4}$ of 4 $\frac{3}{4}$ of 4

b) $\frac{1}{2}$ of 20 $\frac{3}{4}$ of 20

- 9 Scott has some seeds.

He puts $\frac{3}{4}$ of the seeds into his hand.



He puts the rest of the seeds on the table.

How many seeds does Scott have in his hand?

Use a bar model to help you.

