

The children have some counters




There are fewer than
30 counters.

If I arrange the counters into groups
of 5 there is 1 counter left over.




If I arrange the counters into groups of 8
there are 2 counters left over.



How many counters do they have? Have a think



How many counters do they have?



6

11

16


21

26


10

18

26



There are fewer than 30 counters.



If I arrange the counters into groups of 5 there is 1 counter left over.



If I arrange the counters into groups of 8 there are 2 counters left over.

They have 26 counters.

Can you create your own puzzle like this?