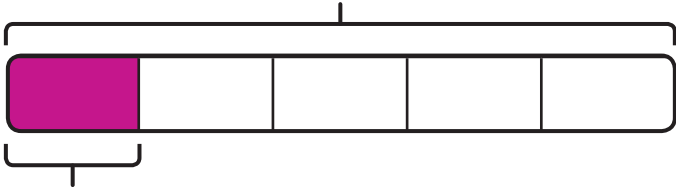


Think together

I Find the required fraction of 20 grapes.

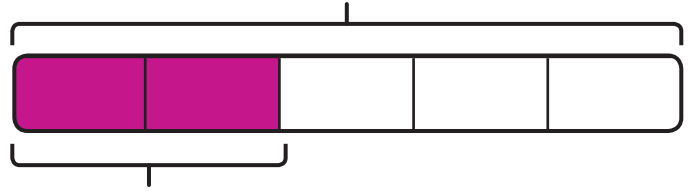
a) Find $\frac{1}{5}$ of 20 grapes.



×

$\frac{1}{5}$ of 20 grapes = grapes.

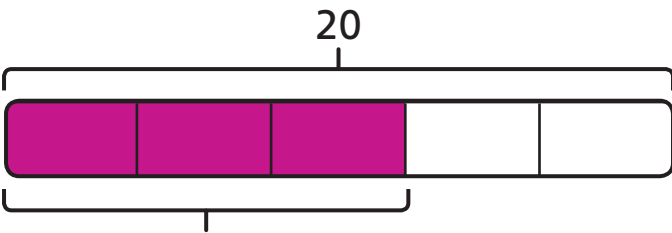
c) Find $\frac{2}{5}$ of 20 grapes.



×

$\frac{2}{5}$ of 20 grapes = grapes.

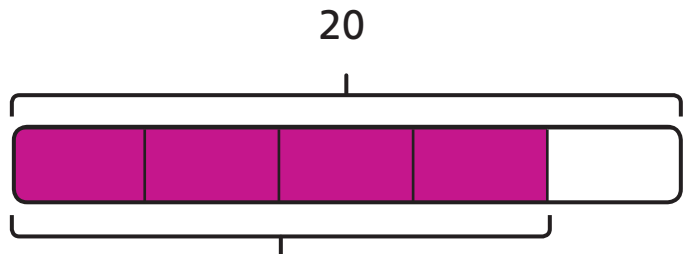
b) Find $\frac{3}{5}$ of the grapes.



×

$\frac{3}{5}$ of 20 grapes = grapes.

d) Find $\frac{4}{5}$ of the grapes.



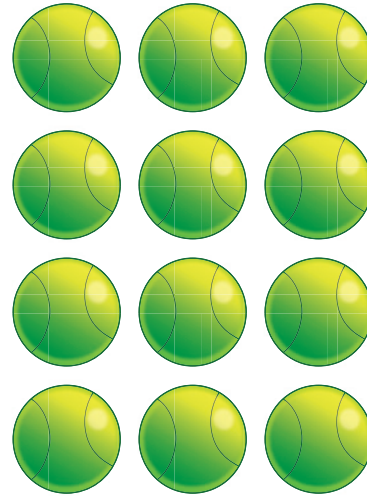

×

$\frac{4}{5}$ of 20 grapes = grapes.

I can use the previous answers to help me calculate the final answer.



2 With your finger, circle $\frac{2}{3}$ of these objects.



a) $\frac{2}{3}$ of 9 =

b) $\frac{2}{3}$ of 12 =

3 Use these facts to find the missing answers.

a) $\frac{1}{4}$ of 16 apples = 4 apples $\frac{3}{4}$ of 16 apples = apples

b) $\frac{1}{9}$ of 45 oranges = 5 oranges $\frac{5}{9}$ of 45 oranges = oranges

c) $\frac{1}{10}$ of 30 kiwis = 3 kiwis $\frac{7}{10}$ of 30 kiwis = kiwis

CHALLENGE



I can use the unit fraction of each group of objects to help me calculate the non-unit fraction of the same amount.